

Pond Water Safari Lab

Page 116


Name: _____

Read the lab first.

Follow the instruction for cotton fibres and
add a drop of Quieting solution
(Methylcellulose)

Draw two pond organisms Try to pick one
animal and one plant:

Name Organism: _____




Magnification: _____

Field of View: _____

Cell Size: _____

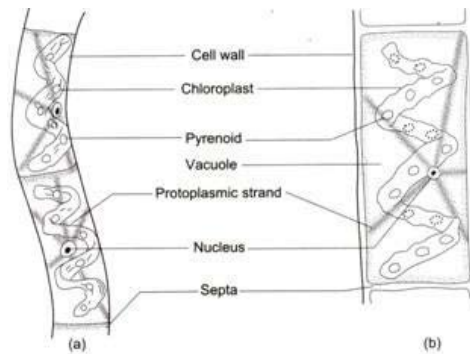
Name Organism: _____



Magnification: _____

Field of View: _____

Cell Size: _____



(a) A part of the filament of *Spirogyra* (b) Detailed structure of a cell

Virtual Pond study: <http://www.microscopy-uk.org.uk/index.html?http://www.microscopy-uk.org.uk/ponddip/>

Do questions Analyze page 117q 2,3,4,5

2.)

3.)

4.)

5.)